

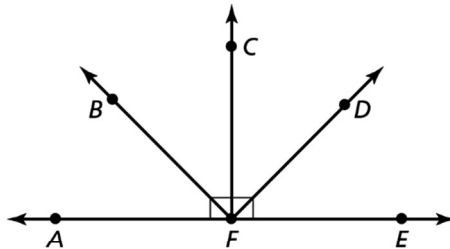
1.5 Puzzle Time

Why Shouldn't You Tell A Pigeon A Secret? Because It ...

Write the letter of each answer in the box containing the exercise number.

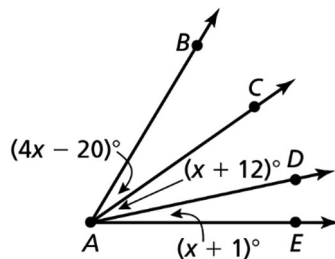
Name an angle with the given classification.

1. right angle
2. obtuse angle
3. straight angle
4. acute angle



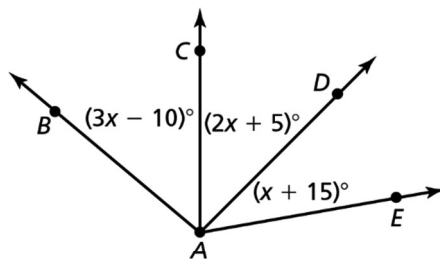
Find the indicated angle measure given $m\angle BAE = 59^\circ$.

5. $m\angle BAC$
6. $m\angle CAD$
7. $m\angle DAE$



Find the indicated angle measure given $m\angle BAE = 130^\circ$.

8. $m\angle BAC$
9. $m\angle CAD$
10. $m\angle DAE$



9	10		4		7	1	2	8	6	3	5
---	----	--	---	--	---	---	---	---	---	---	---

Answers

- I. 23°
- H. 40°
- A. $\angle AFC$
- D. 20°
- S. 35°
- C. 12°
- O. 17°
- R. $\angle AFD$
- U. 70°
- I. 45°
- P. 11°
- R. 24°
- T. 37°
- A. $\angle AFB$
- M. 27°
- E. $\angle AFE$
- U. 75°
- R. 50°